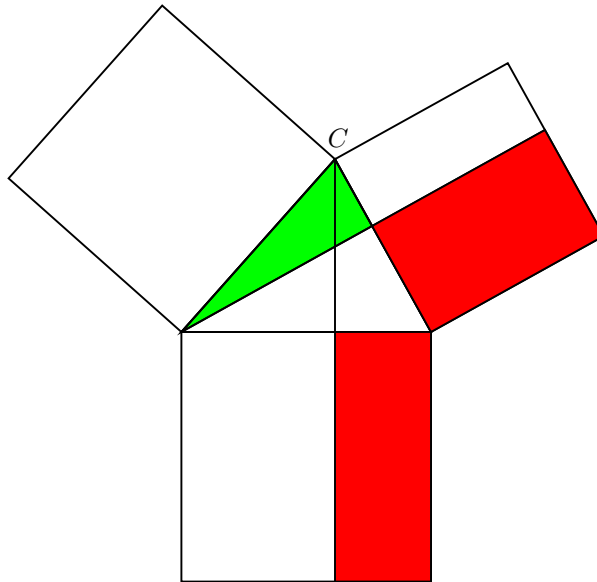
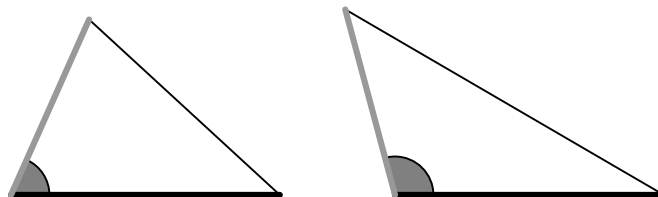


- [25] 1. Do one of these, using in either case lots of pictures and as little text as possible:
- State and prove the cosine rule, using the following picture.



• The following is Proposition I.25 from Euclid: *Suppose we are given two triangles  $ABC$  and  $A'B'C'$  with sides  $AB = A'B'$ ,  $AC = A'C'$ . If  $BC > B'C'$  then  $A > A'$ .*

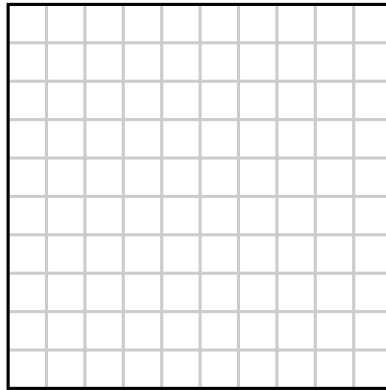
Prove this, starting with the following figure. You should follow Menelaus' proof (reproduced on an extra sheet) as closely as possible. Be careful about the part of Menelaus' proof I have emphasized.







[10] 2. Write a PostScript program which will draw the following figure:



[15] 3. Sketch the figure produced by this program

```
72 dup scale
0.01 setlinewidth
2 2 translate

/N 5 def
/dT 360 N div def
/T dT 0.5 mul def

N {
  newpath
  0 0 moveto
  T cos 0 lineto
  T cos T sin lineto
  closepath

  gsave
  1 0 0 setrgbcolor
  fill
  grestore
  stroke

  1 -1 scale
  newpath
  0 0 moveto
  T cos 0 lineto
  T cos T sin lineto
  closepath
  stroke
  1 -1 scale
  dT rotate
} repeat
```

*Please check your work.*

**The University of British Columbia  
Midterm Examination  
November 9, 1998  
Mathematics 308  
Section 101  
Instructor: Dr. Casselman**

**Duration: 50 minutes**

- Be sure that you have 7 pages in addition to this one.
- Put your name below and on the **back** of the other pages.
- In all questions, **you must show work** — i.e. display intermediate results — to get full credit.
- Be neat! I will not attempt to decipher messy writing.
- *All work you wish to be graded must be placed on these sheets. Work books should be used for scrap work only, and must not be handed in. I will simply throw away any other papers I receive.*

**First Name** \_\_\_\_\_ **Last Name** \_\_\_\_\_

**Signature** \_\_\_\_\_ **Student Number** \_\_\_\_\_

---

---

**Rules governing examinations**

- Each candidate should be prepared to produce upon request his library/AMS card.
  - No candidate shall be permitted to enter the examination room after the expiration of one half hour, or to leave during the first half hour of the examination.
  - Candidates are not permitted to ask questions of the invigilators, except in cases of supposed errors or ambiguities in examination questions.
  - **CAUTION** - Candidates guilty of any of the following or similar practices shall be immediately dismissed from the examination and shall be liable to disciplinary action.
    - (a) Making use of any books, papers, or memoranda, other than those authorized by the examiners.
    - (b) Speaking or communicating with other candidates.
    - (c) Purposely exposing written papers to the view of other candidates.
  - Smoking is not permitted during examinations.
- 
- 

1.	2.	3.	Total
25	10	15	50