

①

grab a survey

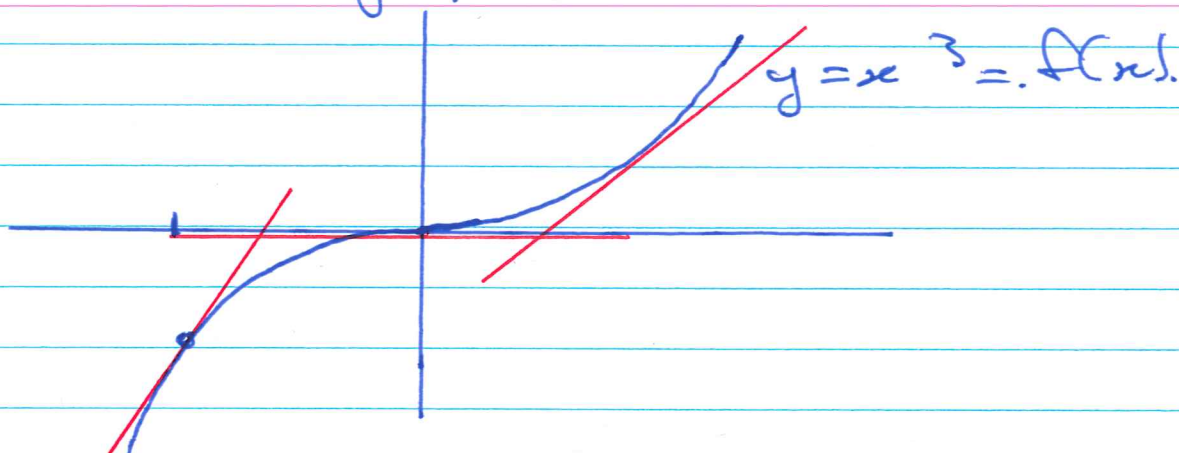
Oct. 12.

- HW4 Due Today
- HW5 (short) Due Monday.
- HW3 returned.

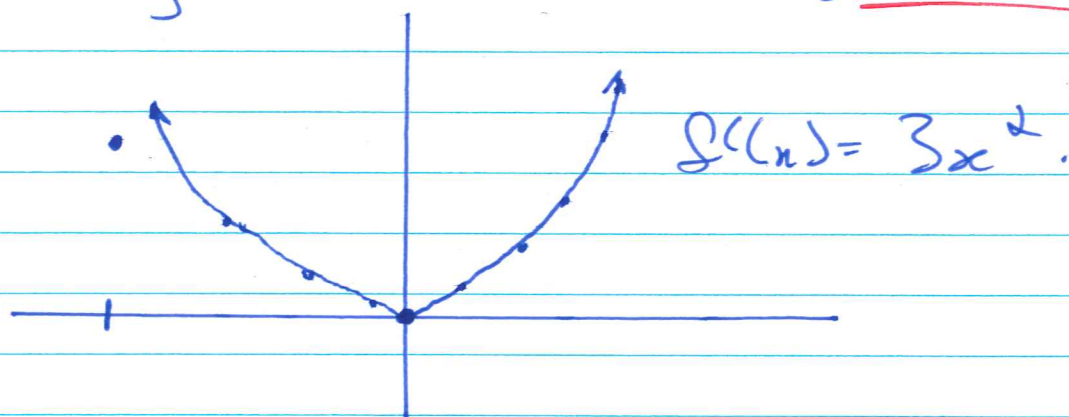
• Quiz #3 - Oct. 21

• Midterm - Oct. 31

Consider the graph of $f(x) = x^3$.



Let us try to sketch the derivative $f'(x)$.



The derivative is a function which gives the slope of $f(x)$ at each point.

2

How to get $f'(x) = 3x^2$.
Last class we applied the definition of the derivative (Eq 2.1)

$$\frac{df}{dx} = f'(x) = \lim_{h \rightarrow 0} \frac{f(x+h) - f(x)}{h}$$

$$f(x) = x^3$$
$$f(x+h) = (x+h)^3$$

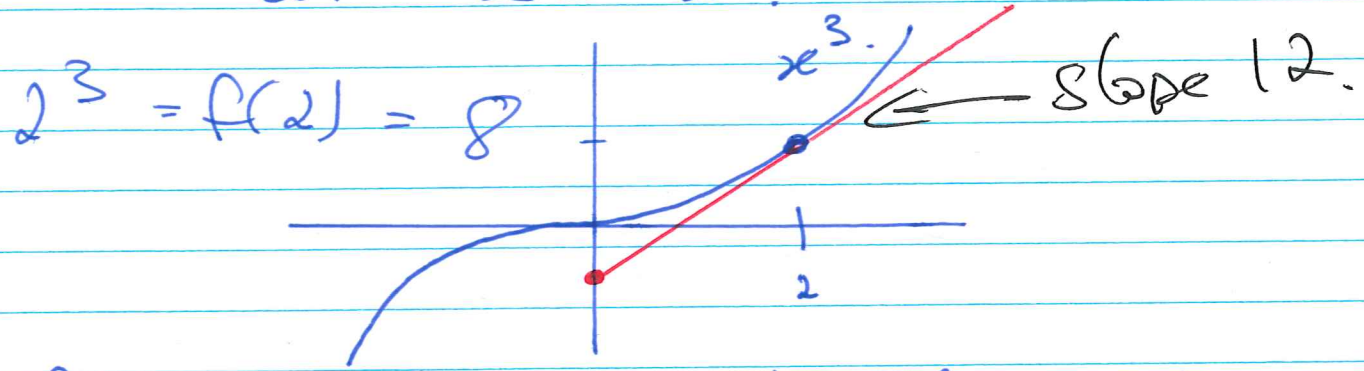
$\left(\frac{0}{0}\right)$ $f'(x) = \lim_{h \rightarrow 0} \frac{(x+h)^3 - x^3}{h}$ ← sub. fails.

algebra.

$$= \lim_{h \rightarrow 0} \frac{x^3 + 3x^2h + 3xh^2 + h^3 - x^3}{h}$$
$$= \lim_{h \rightarrow 0} \frac{3x^2h + 3xh^2 + h^3}{h}$$
$$= \lim_{h \rightarrow 0} \frac{h(3x^2 + 3xh + h^2)}{h}$$
$$= \lim_{h \rightarrow 0} 3x^2 + 3xh + h^2$$
$$= 3x^2 + 0 + 0 = 3x^2$$

③

Example: Find the equation of the line tangent to $f(x) = x^3$ at $x = 2$.



$f'(x) = 3x^2$ gives the slope at x .

At $x = 2$: $f'(2) = 3(2)^2 = 3 \cdot 4 = 12$.

For the equation of the line
We have slope $m = 12$ and point $(2, 8)$.

$$y - y_1 = m(x - x_1)$$

$$y - 8 = 12(x - 2)$$

④

Let's collect what we have:

$$(x^2)' = 2x$$

$$(x^3)' = 3x^2.$$

Any guesses for

$$(x^4)' = 4x^3.$$

In general, we have the Power Rule.

$$\frac{d}{dx} (x^n) = nx^{n-1} \quad (n \text{ is any real number}).$$

The proof goes like this:

$$\frac{d}{dx} (x^n) = \lim_{h \rightarrow 0} \frac{(x+h)^n - x^n}{h}.$$

a bunch of algebra. \rightarrow

$$= \dots = nx^{n-1}.$$

③
Example: Use power rule to find the derivative of $f(x) = \sqrt{x}$.

(Note: this is done in the Lab using limits)

$$f(x) = \sqrt{x} = x^{1/2}$$

$$f'(x) = \frac{1}{2} x^{-1/2} = \frac{1}{2\sqrt{x}}$$

Example: $f(x) = \frac{1}{x}$ (again done in Lab using limits)


$$f(x) = \frac{1}{x} = x^{-1}$$

$$f'(x) = -x^{-2} = \frac{-1}{x^2}$$

ClickerQ: What is the derivative of $f(x) = 5$?

- A) 0 C) $5x$
B) 5 D) $1/5x$

⑥



2) $f(x) = 5 = 5x^0$

$f'(x) = 5 \cdot 0 x^{-1} = 0$

power rule.

3) Limit Definition:

$$f'(x) = \lim_{h \rightarrow 0} \frac{f(x+h) - f(x)}{h}$$

$$= \lim_{h \rightarrow 0} \frac{5 - 5}{h}$$

$$= \lim_{h \rightarrow 0} \frac{0}{h}$$

$$= 0$$

Note: the derivative of any constant is zero.

⑦.

Find the derivative.

Example: • $f(x) = x^\pi$, $f'(x) = \pi x^{\pi-1}$.

~~$f(x) = \frac{1}{x^2} + x^{3/2} - x^{2016} + e^\pi$~~

$$\bullet f(x) = \frac{1}{x^2} + x^{3/2} - x^{2016} + e^\pi$$
$$= x^{-2} + x^{3/2} - x^{2016} + e^\pi$$

constant
number.

$$f'(x) = -2x^{-3} + \frac{3}{2}x^{1/2} - 2016x^{2015} + 0$$

Note: We can take the derivative of each term and add them together.